

## Unit 5 Vocabulary Practice Worksheet

Name \_\_\_\_\_ Class Period \_\_\_\_\_

1. Name an example of each of the following:

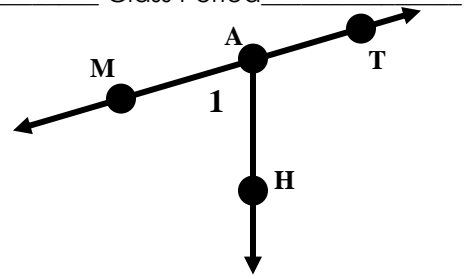
Line Segment: \_\_\_\_\_

A Line: \_\_\_\_\_

A Ray: \_\_\_\_\_

2. Name the angle represented with the number 1 using 3 letters. \_\_\_\_\_

Is this angle an obtuse, acute, or right angle? \_\_\_\_\_



3. Which geometric object is suggested by the light beam from a car's headlights?

a. Line

b. point

c. ray

d. segment

If  $HK = 9$ ,  $HI = JK$ , AND  $IJ = 1$ , find the following lengths.

4.  $HI$  \_\_\_\_\_

5.  $JK$  \_\_\_\_\_

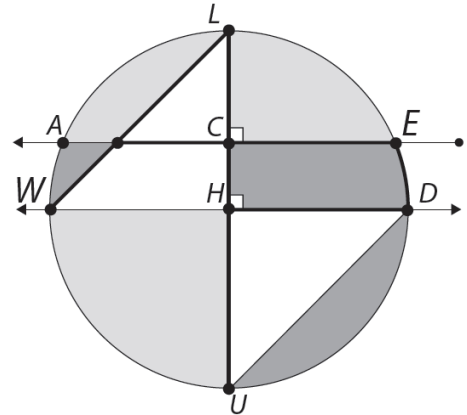
6.  $HJ$  \_\_\_\_\_

7.  $IK$  \_\_\_\_\_



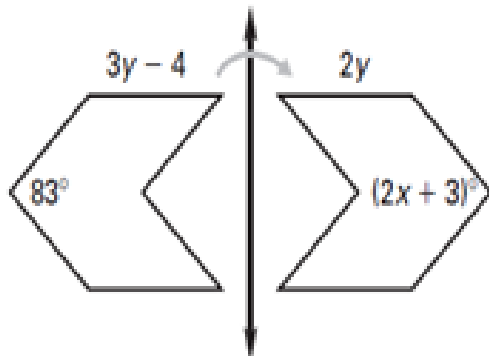
8. Walch Education contracted Ryan Icons to design a logo for the company. They requested the logo be circular and contain the following elements:

- a line
- a ray
- a line segment
- 2 pairs of parallel lines
- 1 pair of perpendicular lines



Find the value of  $x$  and  $y$ .

9.



10.

